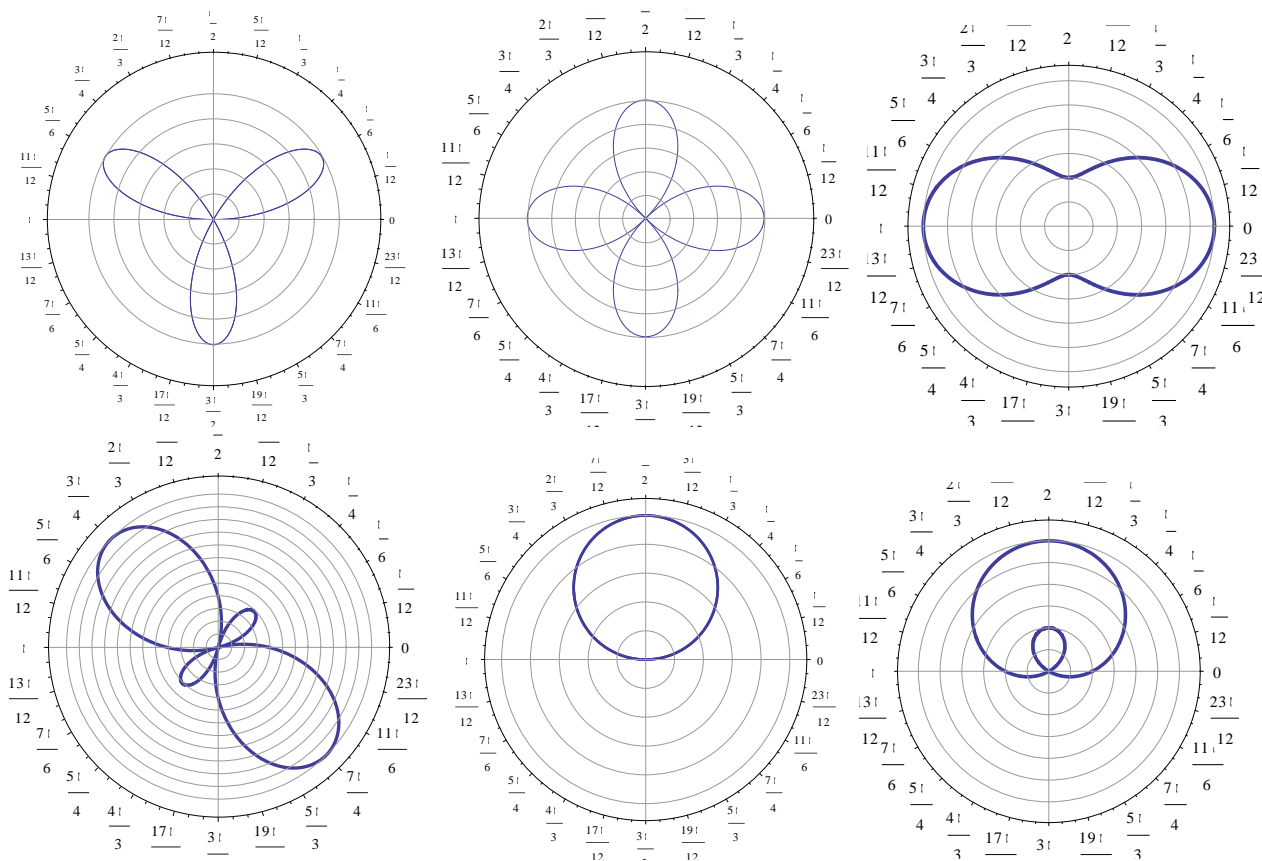


Write all responses on separate paper. Show all work for credit. No calculator is needed for this test.

1. Match the graph with one of the formulas.

- a. $r = \sin \theta$
- b. $r = 1 + 2 \sin \theta$
- c. $r = \sin 3\theta$
- d. $r = \cos 2\theta$
- e. $r = 2 + \cos 2\theta$
- f. $r = 1 - 2 \sin 2\theta$



2. Convert the point whose polar coordinates are given to rectangular coordinates.

a. $(r, \theta) = \left(2, \frac{5\pi}{4}\right)$

b. $(r, \theta) = \left(4, \frac{11\pi}{6}\right)$

3. Find two polar coordinate representations for the rectangular coordinate point, $(x, y) = (2, -\sqrt{3})$ one with $r > 0$ and one with $r < 0$, and both with $0 \leq \theta < 2\pi$.

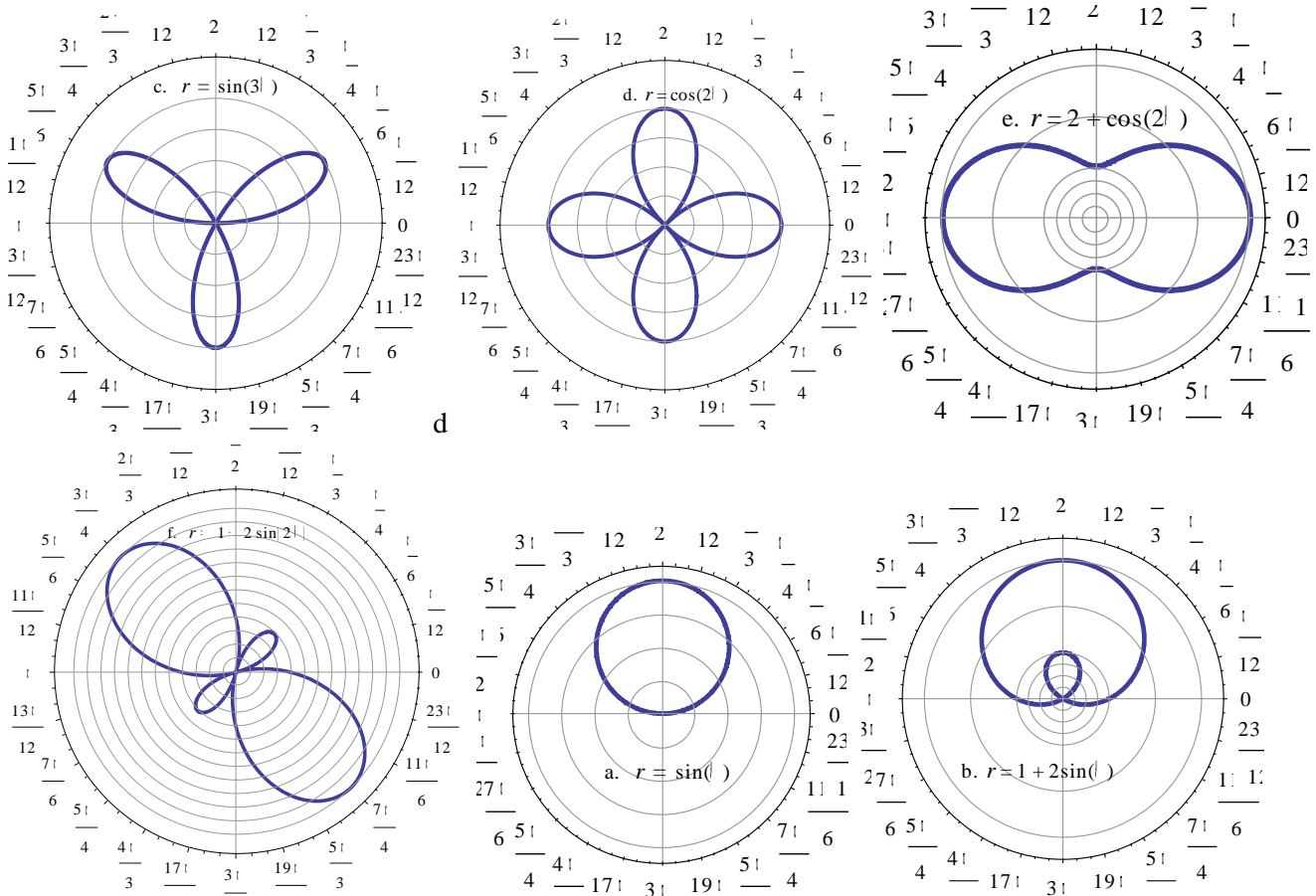
4. Consider the polar equation $r = \cos \theta + \sin \theta$.

- a. Find an equivalent rectangular form for this equation and write it in standard form.

- b. Tabulate values of r corresponding to $\theta = 0, \pm\frac{\pi}{6}, \pm\frac{\pi}{4}, \pm\frac{\pi}{3}, \pm\frac{\pi}{2}$
- c. Plot the points in your table and sketch a graph for the equation.
5. Consider the polar equation $r = \frac{6}{3\cos\theta + 2\sin\theta}$.
- a. Find an equivalent rectangular form for this equation.
- b. Tabulate values of r corresponding to $\theta = 0, \pm\frac{\pi}{6}, \pm\frac{\pi}{4}, \pm\frac{\pi}{3}, \pm\frac{\pi}{2}$
- c. Plot the points in your table and sketch a graph for the equation.
6. First convert to polar form and then sketch a graph for $x^2 + y^2 = (x^2 + y^2 - y)^2$
7. For the complex numbers given, find the product, $z_1 z_2$ and the quotient z_1/z_2 .
- a. $z_1 = 1 - i$ and $z_2 = \sqrt{2} - \sqrt{2}i$
- b. $z_1 = \sqrt{3}\left(\cos\left(\frac{\pi}{6}\right) + i\sin\left(\frac{\pi}{6}\right)\right)$ and $z_2 = \frac{1}{2}\left(\cos\left(\frac{2\pi}{3}\right) + i\sin\left(\frac{2\pi}{3}\right)\right)$
8. Find the eighth power of each complex number.
- a. $\sqrt{3}\left(\cos\left(\frac{\pi}{24}\right) + i\sin\left(\frac{\pi}{24}\right)\right)$
- b. $\sqrt{3} - i$
9. Find the all solutions to each equation.
- a. $z^4 - 1 = 0$
- b. $z^4 - \frac{\sqrt{2}}{2} + \frac{\sqrt{2}}{2}i = 0$

Precalculus – Math 12 – fall '09 – Test 1 Solutions.

1. Match the graph with one of the formulas.



2. Convert the point whose polar coordinates are given to rectangular coordinates.

a. $(r, \theta) = \left(2, \frac{5\pi}{4}\right)$ SOLN: $(x, y) = (r \cos \theta, r \sin \theta) = \left(2 \cos \frac{5\pi}{4}, 2 \sin \frac{5\pi}{4}\right) = (-\sqrt{2}, -\sqrt{2})$

b. $(r, \theta) = \left(4, \frac{11\pi}{6}\right)$ SOLN: $(x, y) = (r \cos \theta, r \sin \theta) = \left(4 \cos \frac{11\pi}{6}, 4 \sin \frac{11\pi}{6}\right) = (2\sqrt{3}, -2)$

3. Find two polar coordinate representations for the rectangular coordinate point, $(x, y) = (2, -\sqrt{3})$ one with $r > 0$ and one with $r < 0$, and both with $0 \leq \theta < 2\pi$.

SOLN: We can choose $r = \pm\sqrt{(2)^2 + (-\sqrt{3})^2} = \pm\sqrt{7}$ and $\theta = \arctan\left(-\frac{\sqrt{3}}{2}\right) = -\arctan\left(\frac{\sqrt{3}}{2}\right)$ or

$\theta = 2\pi - \arctan\left(\frac{\sqrt{3}}{2}\right)$. The polar coordinates that take you to this point in QIV are thus either

$$(r, \theta) = \left(\sqrt{7}, 2\pi - \arctan \frac{\sqrt{3}}{2}\right) \text{ or } (r, \theta) = \left(-\sqrt{7}, \pi - \arctan \frac{\sqrt{3}}{2}\right)$$

4. Consider the polar equation $r = \cos\theta + \sin\theta$.

a. Find an equivalent rectangular form for this equation and write it in standard form.


SOLN: $r = \cos\theta + \sin\theta \Rightarrow r^2 = r\cos\theta + r\sin\theta \Leftrightarrow x^2 + y^2 = x + y \Leftrightarrow \left(x - \frac{1}{2}\right)^2 + \left(y - \frac{1}{2}\right)^2 = \frac{1}{2}$

b. Tabulate values of r corresponding to $\theta = 0, \pm\frac{\pi}{6}, \pm\frac{\pi}{4}, \pm\frac{\pi}{3}, \pm\frac{\pi}{2}$

SOLN:

r	1	$\frac{\sqrt{3}}{2} \pm \frac{1}{2} \approx 0.87 \pm 0.5$	$\frac{\sqrt{2}}{2} \pm \frac{\sqrt{2}}{2} \approx 0.7 \pm 0.7$	$\frac{1}{2} \pm \frac{\sqrt{3}}{2} \approx 0.5 \pm 0.87$	± 1
θ	0	$\pm\frac{\pi}{6}$	$\pm\frac{\pi}{4}$	$\pm\frac{\pi}{3}$	$\pm\frac{\pi}{2}$

c. Plot the points in your table and sketch a graph for the equation.



5. Consider the polar equation $r = \frac{6}{3\cos\theta + 2\sin\theta}$.

a. Find an equivalent rectangular form for this equation.

SOLN: $r = \frac{6}{3\cos\theta + 2\sin\theta} \Leftrightarrow r(3\cos\theta + 2\sin\theta) = 6 \Leftrightarrow 3r\cos\theta + 2r\sin\theta = 6 \Leftrightarrow \boxed{3x + 2y = 6}$

This is a line with slope $-3/2$ and y -intercept 3.

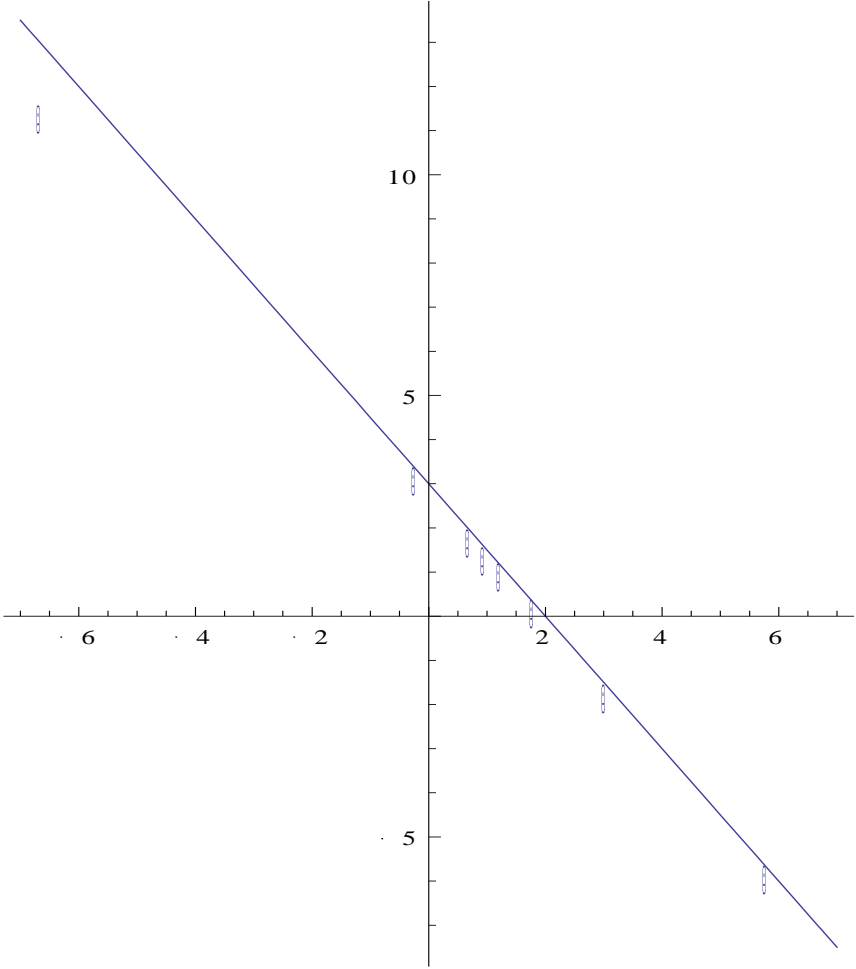
b. Tabulate values of r corresponding to $\theta = 0, \pm\frac{\pi}{6}, \pm\frac{\pi}{4}, \pm\frac{\pi}{3}, \pm\frac{\pi}{2}$

SOLN:

r	2	$\frac{6(3\sqrt{3} \mp 1)}{13} \approx 2.71 \mp 1.04$	$3.6\sqrt{2} \mp 2.4\sqrt{2} \approx 5.1 \mp 3.4$	$-12 \pm 8\sqrt{3} \approx -12 \pm 13.9$	± 3
θ	0	$\pm\frac{\pi}{6}$	$\pm\frac{\pi}{4}$	$\pm\frac{\pi}{3}$	$\pm\frac{\pi}{2}$

Some of these values are not so easy to approximate without a calculator, but given that we have a very simple rectangular form for the equation and the angles are fairly simple to work out where these points are.

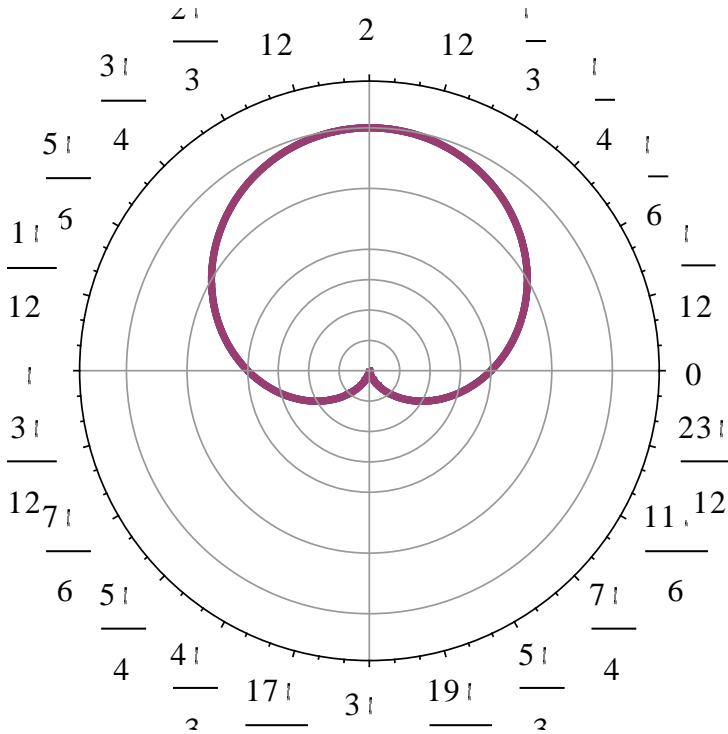
Plot the points in your table and sketch a graph for the equation.
SOLN: (Why the outlier? – I dunno...can't figure it out...)



6. First convert to polar form and then sketch a graph for $x^2 + y^2 = (x^2 + y^2 - y)^2$

$$x^2 + y^2 = (x^2 + y^2 - y)^2 \Leftrightarrow r^2 = (r^2 - r \sin \theta)^2 \Leftrightarrow r = \pm(r^2 - r \sin \theta) \Leftrightarrow \pm 1 = r - \sin \theta$$

$$\Leftrightarrow \boxed{r = \sin \theta \pm 1}$$



7. For the complex numbers given, find the product, $z_1 z_2$ and the quotient z_1 / z_2 .

a. $z_1 = 1 - i$ and $z_2 = \sqrt{2} - \sqrt{2}i$

$$\text{SOLN: } (1-i)(\sqrt{2}-\sqrt{2}i) = -2\sqrt{2}i \text{ and } \frac{1-i}{\sqrt{2}-\sqrt{2}i} \frac{\sqrt{2}+\sqrt{2}i}{\sqrt{2}+\sqrt{2}i} = \frac{\sqrt{2}}{2}$$

b. $z_1 = \sqrt{3} \left(\cos\left(\frac{\pi}{6}\right) + i \sin\left(\frac{\pi}{6}\right) \right)$ and $z_2 = \frac{1}{2} \left(\cos\left(\frac{2\pi}{3}\right) + i \sin\left(\frac{2\pi}{3}\right) \right)$

$$\text{SOLN: } z_1 z_2 = \frac{\sqrt{3}}{2} \left(\cos\left(\frac{5\pi}{6}\right) + i \sin\left(\frac{5\pi}{6}\right) \right) = \frac{\sqrt{3}}{2} \left(-\frac{\sqrt{3}}{2} + \frac{i}{2} \right) = -\frac{3}{4} + \frac{\sqrt{3}}{4}i$$

$$\text{and } \frac{z_1}{z_2} = 2\sqrt{3} \left(\cos\left(-\frac{\pi}{2}\right) + i \sin\left(-\frac{\pi}{2}\right) \right) = 2\sqrt{3}(0-i) = -2\sqrt{3}i$$

8. Find the eighth power of each complex number.

a. $\sqrt{3} \left(\cos\left(\frac{\pi}{24}\right) + i \sin\left(\frac{\pi}{24}\right) \right)$

$$\text{SOLN: } \left(\sqrt{3} \left(\cos\left(\frac{\pi}{24}\right) + i \sin\left(\frac{\pi}{24}\right) \right) \right)^8 = 81 \left(\cos\frac{\pi}{3} + i \sin\frac{\pi}{3} \right) = \frac{81}{2} + i \frac{81\sqrt{3}}{2}$$

$$\begin{aligned} \text{b. } (\sqrt{3}-i)^8 &= \left(2 \left(\cos\left(-\frac{\pi}{6}\right) + i \sin\left(-\frac{\pi}{6}\right) \right) \right)^8 = 256 \left(\cos\left(-\frac{4\pi}{3}\right) + i \sin\left(-\frac{4\pi}{3}\right) \right) = 256 \left(-\frac{1}{2} + \frac{\sqrt{3}}{2}i \right) \\ &= -128 + 128\sqrt{3}i \end{aligned}$$

9. Find the all solutions to each equation.

a. $z^4 - 1 = 0$

SOLN: $\left(\cos\left(\frac{2\pi k}{4}\right) + i \sin\left(\frac{2\pi k}{4}\right) \right)$ for $k = 0, 1, 2, 3$. These come out to

$1, i, -1$ and $-i$

b. $z^4 - \frac{\sqrt{2}}{2} + \frac{\sqrt{2}}{2}i = 0$

SOLN $\left(\frac{\sqrt{2}}{2} - \frac{\sqrt{2}}{2}i \right)^{1/4} = \left(\cos\left(-\frac{\pi}{4} + 2\pi k\right) + i \sin\left(-\frac{\pi}{4} + 2\pi k\right) \right)^{1/4}$

$$= \boxed{\cos\left(-\frac{\pi}{16} + \frac{\pi k}{2}\right) + i \sin\left(-\frac{\pi}{16} + \frac{\pi k}{2}\right)}$$

for $k = 0, 1, 2, 3$