

Show work for credit. Write all responses on separate paper. No calculators.

1. Consider the infinite series $S = \sum_{n=1}^{\infty} \frac{1}{n^2}$
 - a. Explain how you know this is a convergent series.
 - b. Use integrals to show why the error in approximating $S \approx S_9 = \sum_{n=1}^9 \frac{1}{n^2}$ is between $\frac{1}{10}$ and $\frac{1}{9}$.
 - c. Find a value of n that will ensure that the error in the approximation $S \approx S_n$ is less than $\frac{1}{500}$.

2. Determine whether the series is convergent or divergent. Justify your answer.
 - a. $\sum_{n=1}^{\infty} \frac{n^2}{1+n^3}$
 - b. $\sum_{n=1}^{\infty} 9 \cos \frac{1}{n}$
 - c. $\sum_{n=1}^{\infty} (-1)^n \frac{n^3}{n^4+n^3}$

3. Find a power series representation for the function. Find the radius and interval of convergence for each.
 - a. $f(x) = \frac{1}{1-x^2}$
 - b. $g(x) = \frac{x}{5x^2+1}$

4. Use differentiation or integration to find a power series for the function.
 - a. $f(x) = \frac{1}{(3+x)^2}$
 - b. $L(x) = \ln(1+x^2)$

5. Consider $f(x) = \frac{10}{\sqrt[4]{1+x}}$
 - a. Expand $f(x)$ as a power series.
 - b. Use the first three non-zero terms of the series to approximate $f\left(\frac{1}{5}\right)$ and use the first neglected term to approximate the error in approximation.

6. Approximate $f(x) = e^{3x^2}$ by a Taylor polynomial of degree 4, expanded about $x = 0$.

7. Find the first 3 non-zero terms of $f(x) = e^x \cos x$, expanded about $x = 0$. *Hint:* Multiply the Maclaurin series and combine like terms.

Math 1B –Calculus – Chapter 11 Problems Solutions

1. Consider the infinite series $S = \sum_{n=1}^{\infty} \frac{1}{n^2}$

- a. Explain how you know this is a convergent series.

SOLN: It's a p-series with $p > 1$, therefore it's convergent.

Also, the terms are all positive and decreasing so the integral test yields,

$$\int_1^{\infty} \frac{1}{x^2} dx = \lim_{k \rightarrow \infty} -\frac{1}{x} \Big|_1^k = 0 - (-1) = 1. \text{ Since the integral converges, the series converges.}$$

- b. Use integrals to show why the error in approximating $S \approx S_9 = \sum_{n=1}^9 \frac{1}{n^2}$ is between $\frac{1}{10}$ and $\frac{1}{9}$.

$$\text{SOLN: } \int_{10}^{\infty} \frac{1}{x^2} dx = \lim_{k \rightarrow \infty} -\frac{1}{x} \Big|_{10}^k = \frac{1}{10} < S - S_9 < \int_9^{\infty} \frac{1}{x^2} dx = \lim_{k \rightarrow \infty} -\frac{1}{x} \Big|_9^k = \frac{1}{9}.$$

- c. Find a value of n that will ensure that the error in the approximation $S \approx S_n$ is less than $\frac{1}{500}$.

$$\text{SOLN: } S - S_N < \int_N^{\infty} \frac{1}{x^2} dx = \lim_{k \rightarrow \infty} -\frac{1}{x} \Big|_N^k = \frac{1}{N} \leq \frac{1}{500} \text{ if } N \geq 500$$

2. Determine whether the series is convergent or divergent. Justify your answer.

a. $\sum_{n=1}^{\infty} \frac{n^2}{1+n^3}$

SOLN: $\frac{n^2}{1+n^3} \geq \frac{n^2}{n^3+n^3} = \frac{1}{2n}$, thus $\sum_{n=1}^{\infty} \frac{n^2}{1+n^3} > \frac{1}{2} \sum_{n=1}^{\infty} \frac{1}{n}$ diverges (harmonic series diverges, or p-series with $p = 1$.) Therefore the series diverges by comparison.

b. $\sum_{n=1}^{\infty} 9 \cos \frac{1}{n}$

SOLN: Here $\lim_{n \rightarrow \infty} 9 \cos \frac{1}{n} = 9 \neq 0$, so the series diverges by the n th term test.

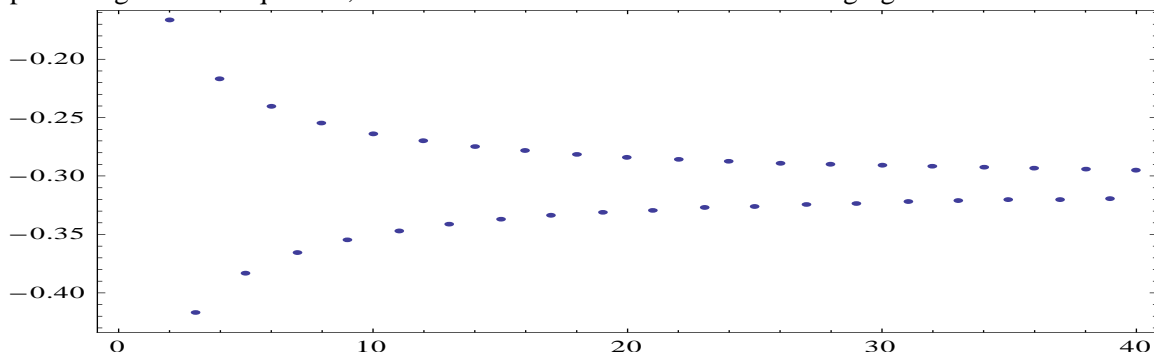
c. $\sum_{n=1}^{\infty} (-1)^n \frac{n^3}{n^4+n^3}$. Note this is more simply expressed as $\sum_{n=1}^{\infty} (-1)^n \frac{1}{n+1}$

SOLN: This is an alternating series with decreasing terms and $\lim_{n \rightarrow \infty} \frac{1}{n+1} = 0$, therefore it is convergent.

$$\text{Furthermore } \ln(1+x) = \int \frac{dx}{1+x} = \int \frac{1}{1-(-x)} dx = \int \sum_{n=0}^{\infty} (-x)^n dx = \sum_{n=0}^{\infty} (-1)^n \int x^n dx = \sum_{n=0}^{\infty} \frac{(-1)^n x^{n+1}}{n+1}$$

$$\text{So } \ln 2 = 1 + \sum_{n=1}^{\infty} (-1)^n \frac{1}{n+1} \Rightarrow \sum_{n=1}^{\infty} (-1)^n \frac{1}{n+1} = (\ln 2) - 1 \approx -0.30685281944$$

The Mathematica Command `ListPlot[Table[{n, Sum[(-1)^i * (i + 1)^-1, {i, 1, n}]], {n, 1, 40}], Frame -> True, Axes -> False]` Produces a plot of the first 40 partial sums...you can see them as a damped oscillating producing two subsequences, each bounded and monotonic and converging towards $\ln 2 - 1$:



3. Find a power series representation for the function. Find the radius and interval of convergence for each.

a. $f(x) = \frac{1}{1-x^2}$

SOLN: $\frac{1}{1-x^2} = \sum_{n=0}^{\infty} (x^2)^n = \sum_{n=0}^{\infty} x^{2n}$ The radius of convergence is 1 and the interval of convergence is $(-1,1)$.

b. $g(x) = \frac{x}{5x^2+1}$

SOLN: $\frac{x}{5x^2+1} = x \cdot \frac{1}{1-(-5x^2)} = x \cdot \sum_{n=0}^{\infty} (-5x^2)^n = \sum_{n=0}^{\infty} (-1)^n 5^n x^{2n+1}$

The ratio test has $\lim_{n \rightarrow \infty} \left| \frac{a_{n+1}}{a_n} \right| = \lim_{n \rightarrow \infty} \left| \frac{5^{n+1} x^{2n+3}}{5^n x^{2n+1}} \right| = 5x^2 < 1 \Leftrightarrow -\frac{\sqrt{5}}{5} < x < \frac{\sqrt{5}}{5} x$ So the radius of

convergence is $\frac{\sqrt{5}}{5}$. If $x = \pm \frac{\sqrt{5}}{5}$ then $\sum_{n=0}^{\infty} (-1)^n 5^n x^{2n+1} = \frac{\sqrt{5}}{5} \sum_{n=0}^{\infty} (-1)^n 5^n \left(\pm \frac{\sqrt{5}}{5} \right)^{2n}$

$= \frac{\sqrt{5}}{5} \sum_{n=0}^{\infty} (-1)^n 5^n \left(\frac{1}{5} \right)^n = \frac{\sqrt{5}}{5} \sum_{n=0}^{\infty} (-1)^n$ is divergent. Thus the interval of

convergence is $\left(-\frac{\sqrt{5}}{5}, \frac{\sqrt{5}}{5} \right)$

4. Use differentiation or integration to find a power series for the function.

a. $f(x) = \frac{1}{(3+x)^2}$

SOLN: $\frac{1}{(3+x)^2} = -\frac{1}{3} \frac{d}{dx} \left(\frac{1}{1-\left(-\frac{x}{3}\right)} \right) = -\frac{1}{3} \frac{d}{dx} \sum_{n=0}^{\infty} \left(-\frac{x}{3}\right)^n = \sum_{n=0}^{\infty} \left(-\frac{1}{3}\right)^{n+1} \frac{d}{dx} x^n$

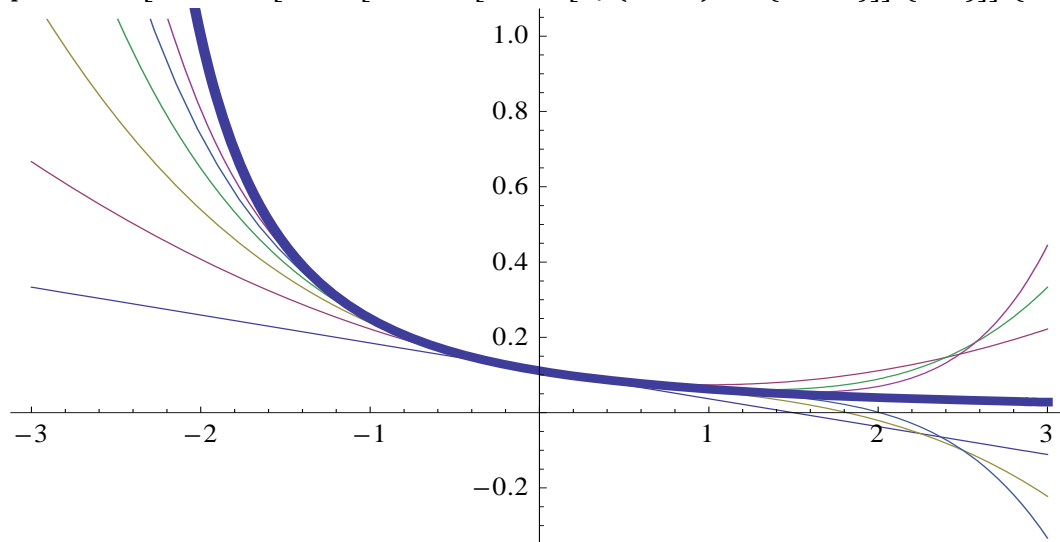
$$= \sum_{n=0}^{\infty} \left(-\frac{1}{3}\right)^{n+1} n x^{n-1} = \sum_{n=0}^{\infty} \left(-\frac{1}{3}\right)^{n+2} (n+1) x^n$$

To be sure, the Mathematica command, `Series[1/(3+x)^2, {x, 0, 6}]`, produces the first 6 terms

of the series: $\frac{1}{9} - \frac{2x}{27} + \frac{x^2}{27} - \frac{4x^3}{243} + \frac{5x^4}{729} - \frac{2x^5}{729} + \frac{7x^6}{6561} + O(x^7)$.

Furthermore, the sequence of approximating polynomials can be graphed in the interval of convergence $(-3,3)$ using

`p1 = Plot[Evaluate[Table[Normal[Series[1/(3+x)^2, {x, 0, n}]], {n, 6}], {x, -3, 3}]`



b. $L(x) = \ln(1 + x^2)$

SOLN: $\ln(1 + x^2) = \int \frac{2x}{1+x^2} dx = 2 \int x \cdot \frac{1}{1-(-x^2)} dx =$

$$2 \int x \cdot \sum_{n=0}^{\infty} (-1)^n x^{2n} dx$$

$$= \sum_{n=0}^{\infty} (-1)^n 2 \int x^{2n+1} dx = \sum_{n=0}^{\infty} (-1)^n \frac{x^{2n+2}}{n+1}$$

5. Consider $f(x) = \frac{10}{\sqrt[4]{1+x}}$

a. Expand $f(x)$ as a power series.

SOLN: $10(1+x)^{-1/4} = 10 \sum_{n=0}^{\infty} \binom{-1/4}{n} x^n$. As to $\binom{-1/4}{n} = \frac{(-1/4)(-5/4)(-9/4)\dots(-1-n+1)}{n!}$

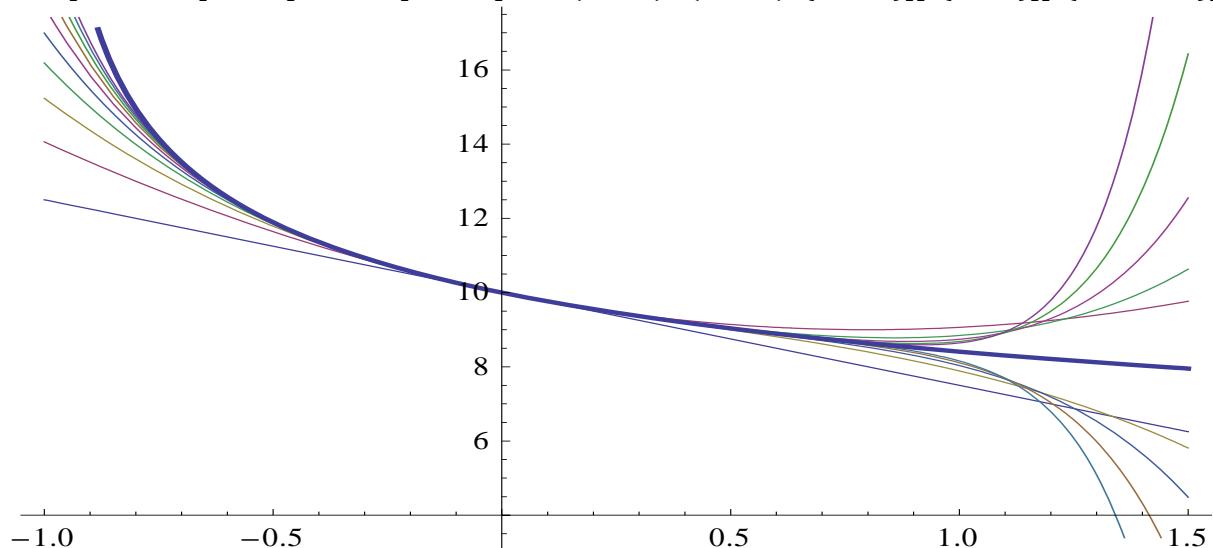
b. Use the first three non-zero terms of the series to approximate $f(1/5)$ and use the first neglected term to approximate the error in approximation.

SOLN: $\frac{10}{\sqrt[4]{1+x}} \approx 10 \left(1 - \frac{1}{4}x + \frac{5}{32}x^2 \right)$ so that $\frac{10}{\sqrt[4]{1+1/5}} \approx 10 - \frac{1}{2} + \frac{1}{16} = \frac{153}{16}$

The error in approximation is less than $10 \left(\frac{45}{128} \right) \left(\frac{1}{5^3} \right) = \frac{9}{320}$

As an afterthought, we can use the Mathematica command, `Series[10/(1+x)1/4, {x, 0, 6}]` = $10 - \frac{5x}{2} + \frac{25x^2}{16} - \frac{75x^3}{64} + \frac{975x^4}{1024} - \frac{3315x^5}{4096} + \frac{23205x^6}{32768} + O(x^7)$ for the first 7 terms, and plot these:

`Plot[Evaluate[Table[Normal[Series[10 * (1+x)-1/4, {x, 0, n}]], {n, 10}], {x, -1, 1.5}]`



6. Approximate $f(x) = e^{3x^2}$ by a Taylor polynomial of degree 4, expanded about $x = 0$.

SOLN: $e^{3x^2} = \sum_{n=0}^{\infty} \frac{(3x^2)^n}{n!} \approx 1 + 3x^2 + \frac{9x^4}{2}$

7. Find the first 3 non-zero terms of $f(x) = e^x \cos x$, expanded about $x = 0$. *Hint:* Multiply the Maclaurin series and combine like terms.

$$\text{SOLN: } e^x \cos x = \left(1 + x + \frac{x^2}{2} + \frac{x^3}{3!} + \frac{x^4}{4!} + \dots\right) \left(1 - \frac{x^2}{2} + \frac{x^4}{4!} - \dots\right) \approx 1 + x - \frac{1}{3}x^3$$

Using the Mathematica commands,

```
P1 = Plot[Evaluate[Table[Normal[Series[Exp[x] * Cos[x], {x, 0, n}]], {n, 6}], {x, -Pi, Pi}]
```

```
P2 = Plot[Exp[x] * Cos[x], {x, -Pi, Pi}, PlotStyle -> {Thickness[0.01]]]
```

and then the command, Show[P1, P2], we get up to the best 6th degree polynomial approximation. Note that only 4 of these are different since the coefficient of x^2 and the coefficient of x^6 are both 0:

$$\text{Series[Exp[x] * Cos[x], {x, 0, 6}] = 1 + x - \frac{x^3}{3} - \frac{x^4}{6} - \frac{x^5}{30} + O(x^7)$$

